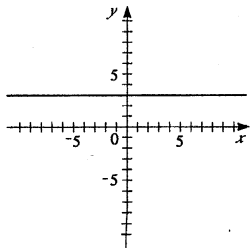
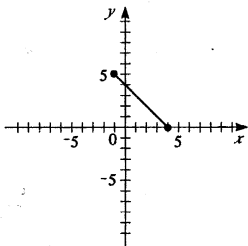


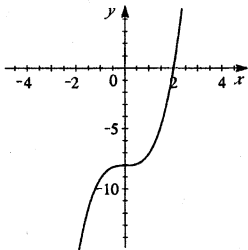
19. $f(x) = 3$



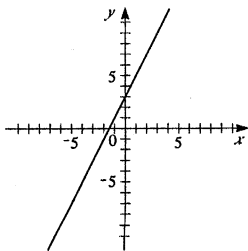
23. $f(x) = -x + 4, -1 \leq x \leq 4$



27. $g(x) = x^3 - 8$



21. $f(x) = 2x + 3$



25. $f(x) = -x^2$

