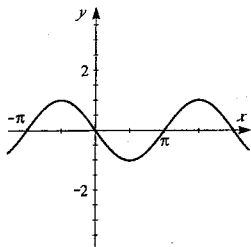
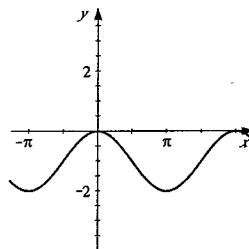


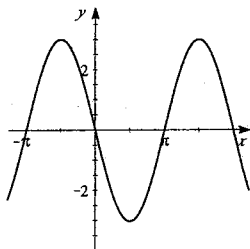
2. $y = -\sin x$



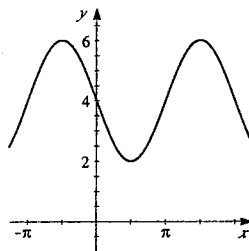
4. $y = -1 + \cos x$



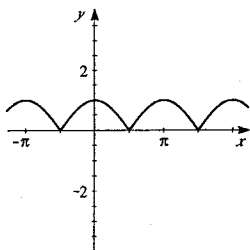
6. $y = -3 \sin x$



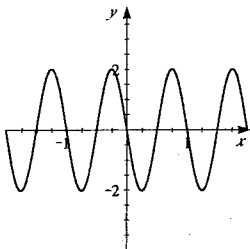
8. $y = 4 - 2 \sin x$



10. $y = |\cos x|$



12. $y = -2 \sin 2\pi x$
amplitude = 2, period = 1



14. $y = \cos 10\pi x$
amplitude = 1, period = $\frac{1}{5}$

